




TABLE OF CHANGE

	LINEAR	CYCLIC	"HIDDEN"
<i>Requires Energy for Change? (Yes/No)</i>			
<i>Definition</i>			
<i>Typical Shape of Graph Representing the Change</i> <i>(no need to label each axis)</i>			
<i>How it is Different From the Other Two</i>			

Indicate whether each of the following is a Linear change or Cyclic change.

1. A new school year starts in September _____
2. A child loses its last baby tooth _____
3. A volcano erupts and blows its top off _____
4. The seasons _____
5. An earthquake occurs in California _____
6. A pile of rocks fall down from the top of a cliff _____
7. Sunrise and Sunset _____
8. Changes in the ocean's temperature during the year _____
9. The orbit of a planet _____
10. The formation of a star _____