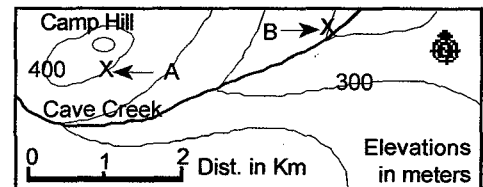


The Earth Science Reference Tables is undoubtedly your most important resource for the Earth Science Regents exam. A knowledge of the information in the ESRT and how to use it will be of critical importance in your performance. Please keep in mind that completing this paper should be a learning activity. If you are unable to answer any of these items, use this an opportunity to pick up new skills.

• **Referemnce Tables; Page 1**

1. How wide is this sheet of paper, to the nearest 0.1 cm? _____ ...in meters? _____
2. Which of the radioactive substances listed on this page has the shortest half life? _____
3. Write the half life of Uranium-238 as a standard number. _____
4. If you started with 100 g of K-40, how much would remain k-40 after 3.9×10^9 years? _____
5. What common substance requires the most energy to heat up a unit mass by 10°C ? _____
6. Which uses more energy, melting a 10 g ice cube or evaporating 10 g of water? _____
7. If I estimated a rock to have a volume of 20 cm^3 , but careful measurement showed it's true volume to be 25 cm^3 , what would be the percent deviation of my estimate?
 (Please show you work for items 5 ↗ and 6 ↘.)

8. What is the average gradient from A to B?



• **Page 2**

9. In what landscape region do you live? _____
10. What is the landscape region around Old Forge, NY? _____
11. The Catskill Mountains are a part of what larger landscape area? _____

• **Page 3**

12. If you want to drive from Albany to Buffalo, what direction must you travel? _____
13. What are the approximate terrestrial coordinates of Watertown, NY? _____

14. What is the numerical age of the bedrock around Syracuse, NY? _____
15. What is the metric distance from Syracuse to Utica? _____
16. As water flows from Lake Erie into Lake Ontario, most of the change in elevation is at Niagara Falls. What is the total change in elevation? _____
17. Which kind of rocks are most common in the Catskills? Igneous, Metamorphic or Sedimentary
18. What New York landscape region has the oldest bedrock? _____

Page 4

19. What ocean current keeps Europe relatively warm? _____
20. How do local ocean currents affect the climate along the western coast of South America? _____
21. What major ocean current can be found at 50°S, 50°W? _____

Page 5

22. With respect to Africa, in what direction is South America drifting? _____
23. What kind of plate boundary is the Mid-Atlantic Ridge? Transform, Spreading or Subduction
24. What is the major active fault in the Western United States?? _____
25. What has caused the growth of the Himalayan Mountains, north of India? _____
26. Where is the nearest major mantle hot spot/plume? _____

Page 6

27. What is the final step in the formation of sediment? _____
28. What do we call sediment composed of particles 1 cm across? _____
29. How does gabbro differ from basalt? _____
30. What is the most abundant mineral in diorite? _____
31. How fast a stream current is required to transport the smallest boulders? _____
32. What five minerals are common in basalt? _____

Page 7

- 33. What minerals are most common in sandstone? _____
- 34. Which clastic (fragmental) rock is composed of the smallest particles? _____
- 35. What mineral is most abundant in rock salt? (The mineral is not called salt.) _____
- 36. What mineral family is common in slate, phyllite, schist and gneiss? _____
- 37. What is the texture of quartzite? _____
- 38. What metamorphic rock is primarily composed of calcite? _____

Pages 8 & 9

- 39. When did North America split apart from Africa and Europe? _____
- 40. How old is the Earth? _____
- 41. What is the first period of the Paleozoic era? _____
- 42. What two periods are *not* represented in the bedrock of New York? _____
- 43. What animal group first evolved about the same time as the dinosaurs? _____

Page 10

- 44. At what two depths within the Earth is the temperature above the melting point? _____
- 45. What is Earth's radius in kilometers? _____ What is its diameter? _____
- 46. What is the composition of Earth's core? _____
- 47. Which layer of the Earth is the least dense? _____ Most dense; _____
- 48. In what part of the Earth does the temperature increase fastest with depth? _____

Pages 11

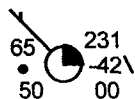
49. What is the two most common element in the oceans? _____
50. How long does it take an S-wave to travel 6000 km? _____ ...a P-wave? _____
51. How far away is the epicenter if the P-wave arrives 5 minutes before the S-wave? _____
52. What element makes up about 6% of crustal rocks by mass, but only ½% by volume? _____
53. How far can a P-wave travel in 5 minutes, 40 seconds? _____

Pages 12

54. If the wet bulb reads 4°C and the dry bulb records 12°C, what is the dewpoint? _____
55. What is the relative humidity in the conditions specified above? _____
56. What does a negative dewpoint mean? _____

Pages 13

57. What is the Kelvin temperature of 0° C? _____ What is this temperature in Fahrenheit? _____
58. What is the normal atmospheric pressure in inches of mercury? _____
59. What is the Fahrenheit temperature at this weather station? _____ Celsius? _____
60. What is the atmospheric pressure? _____ Is it rising or falling? _____
61. Wind speed? _____ Wind direction? _____ Cloud Cover? _____
62. A maritime tropical air mass is _____ and _____. (You should know this.)



Pages 14

63. How does the air temperature change as you go higher within the mesosphere? _____
64. What name has been given to the boundary at the bottom of the atmosphere? _____
65. What form of electromagnetic energy has a wavelength just too long to be visible to us? _____
66. What is the approximate wavelength of visible light? _____


67. What is the prevailing wind direction 45° south of the equator? _____
68. Why is precipitation so abundant near the equator? _____

Pages 15

69. Although Barnard's Star is relatively close to us, it is hard to see?
Compared to the sun, how much light does Barnard's Star give off? _____
70. The North Star is similar to the sun in _____ and _____.
How is it very different? _____
71. Rigel and Betelgeuse are two of the brightest stars in the prominent winter constellation Orion.
How does Betelgeuse appear different from Rigel to us? _____
72. Of the nine planets, which one spins the fastest on its axis? _____
73. Which planet has the most out of round (flattened) orbit? _____
74. Which planet is closest to the Earth in size? _____
75. Approximately how much larger is the sun's diameter than the diameter of the Earth? _____

Pages 16

76. What mineral has a nonmetallic luster, scratches glass and is often pink? _____
77. Name two common minerals that are chemical elements _____ and _____
78. What is the most obvious difference between amphibole and pyroxene? _____
79. What other minerals form crystals similar in shape to pyrite? _____



Tips: At Your Finger Tips (Ref. Tables Review)

Difficulty: Should be Fairly Easy

Content: Very Important

Mode of Instruction: Individual Work or Small Group Work
(If you opt for small groups, be sure that the slower students are not just copying the answers from their quicker peers.)

Preparations: None

Materials: Class set of Reference Tables

Time: 30 - 40 minutes (??)

Suggestions for the Teacher: 1. Monitor the students to be sure they are picking up needed skills and to get feedback on how well you have taught them.

Student Intro: 1. Stress that the Regents exam puts a heavy emphasis on the use of the ESRT. Mastery of that resources is critical (!!)

2. This should be a learning activity, not just a race to see if you can finish quickly.

Post-Lab: Can be followed up with a “Jeopardy” type game. The problem with such games is that the students who need the skills tend to be those who participate least.

Extensions: None

Source: TMcG

38. Marble
39. Between the Triassic and the Cretaceous
40. Approximately 4.6 billion years
41. The Cambrian
42. Permian and Tertiary
43. Mammals
44. 200-600 km and 2900 - 4800 km
45. About 6300 km; About 12600 km
46. Iron and Nickel
47. The Crust (or the Lithosphere); The Inner Core
48. The Crust (or the Lithosphere)

49. Hydrogen and Oxygen
50. 17 minutes; 9 minutes, 25 seconds
51. About 3500 km
52. Iron
53. 3000 km
54. -9°C
55. 19%
56. Frost (solid) would form instead of dew (liquid).
57. 273°K; 32°F
58. 29.92 inches of mercury
59. 65°F; 18°C
60. 1023.1 mb and falling
61. 5 knots from the northwest; 25% Cloud cover
62. Moist and Warm
63. It Decreases
64. Sea level
65. Infrared
66. $4-7 \times 10^{-5}$ cm

67. From the North West
68. Rising air cools causing precipitation.
69. Just over one part in 10,000. (About $\frac{1}{100}$ of 1%)
70. Temperature and color
71. Betelgeuse is more red in color.
72. Jupiter
73. Pluto
74. Venus
75. Approximately 100 times
76. Potassium Feldspar
77. Graphite and Sulfur
78. Pyroxene cleaves at right angles.
79. Galena and Halite also form cubic crystals.

1. 21.6 cm = 0.216 m
2. Carbon-14
3. 4,500,000,000 years (4½ billion years)
4. 12.5 grams
5. Water (as a liquid)
6. Evaporating the 10 g of water (Almost 7 x as much)
7. % Deviation = Difference/Accepted Value x 100 = 5 cm³/25 cm³ = 20%
8. Gradient = D Field Value/D Distance = 150 m/3 km = 50 m/km
9. (various)
10. Adirondack Mountains
11. Allegheny Plateau
12. West
13. 44°N, 76°W

14. 408 - 438 million years
15. About 75 km
16. 175 m - 75 m = 100 m
17. Sedimentary
18. Adirondack Mountains
19. The North Atlantic Drift
20. It is cooled by the Peru Current.
21. Falkland Current
22. West
23. A Spreading Boundary
24. San Andreas Fault.
25. India is colliding with the continent of Asia.
26. Yellowstone (In Wyoming)
27. Deposition
28. Pebbles
29. Gabbro has larger crystals (It is coarser grained.)
30. Plagioclase Feldspar
31. About 300 cm/s
32. Plagioclase, Pyroxene, Biotite, Amphibole and Olivine

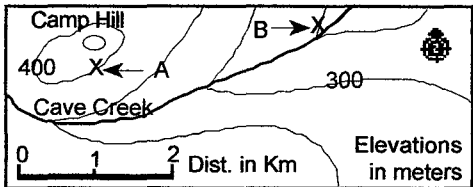
33. Quartz, Feldspar and Clay
34. Shale
35. Halite
36. Mica
37. Nonfoliated

The Earth Science Reference Tables is undoubtedly your most important resource for the Earth Science Regents exam. A knowledge of the information in the ESRT and how to use it will be of critical importance in your performance. Please keep in mind that completing this paper should be a learning activity. If you are unable to answer any of these items, use this an opportunity to pick up new skills.

• **Referemnce Tables; Page 1**

1. How wide is this sheet of paper, to the nearest 0.1 cm? _____ ...in meters? _____
2. Which of the radioactive substances listed on this page has the shortest half life? _____
3. Write the half life of Uranium-238 as a standard number. _____
4. If you started with 100 g of K-40, how much would remain k-40 after 3.9×10^9 years? _____
5. What common substance requires the most energy to heat up a unit mass by 10°C ? _____
6. Which uses more energy, melting a 10 g ice cube or evaporating 10 g of water? _____
7. If I estimated a rock to have a volume of 20 cm^3 , but careful measurement showed it's true volume to be 25 cm^3 , what would be the percent deviation of my estimate?
(Please show you work for items 5 ↗ and 6 ↘.)

8. What is the average gradient from A to B?



• **Page 2**

9. In what landscape region do you live? _____
10. What is the landscape region around Old Forge, NY? _____
11. The Catskill Mountains are a part of what larger landscape area? _____

• **Page 3**

12. If you want to drive from Albany to Buffalo, what direction must you travel? _____
13. What are the approximate terrestrial coordinates of Watertown, NY? _____

14. What is the numerical age of the bedrock around Syracuse, NY? _____
15. What is the metric distance from Syracuse to Utica? _____
16. As water flows from Lake Erie into Lake Ontario, most of the change in elevation is at Niagara Falls. What is the total change in elevation? _____
17. Which kind of rocks are most common in the Catskills? Igneous, Metamorphic or Sedimentary
18. What New York landscape region has the oldest bedrock? _____

Page 4

19. What ocean current keeps Europe relatively warm? _____
20. How do local ocean currents affect the climate along the western coast of South America? _____
21. What major ocean current can be found at 50°S, 50°W? _____

Page 5

22. With respect to Africa, in what direction is South America drifting? _____
23. What kind of plate boundary is the Mid-Atlantic Ridge? Transform, Spreading or Subduction
24. What is the major active fault in the Western United States?? _____
25. What has caused the growth of the Himalayan Mountains, north of India? _____
26. Where is the nearest major mantle hot spot/plume? _____

Page 6

27. What is the final step in the formation of sediment? _____
28. What do we call sediment composed of particles 1 cm across? _____
29. How does gabbro differ from basalt? _____
30. What is the most abundant mineral in diorite? _____
31. How fast a stream current is required to transport the smallest boulders? _____
32. What five minerals are common in basalt? _____

Page 7

- 33. What minerals are most common in sandstone? _____
- 34. Which clastic (fragmental) rock is composed of the smallest particles? _____
- 35. What mineral is most abundant in rock salt? (The mineral is not called salt.) _____
- 36. What mineral family is common in slate, phyllite, schist and gneiss? _____
- 37. What is the texture of quartzite? _____
- 38. What metamorphic rock is primarily composed of calcite? _____

Pages 8 & 9

- 39. When did North America split apart from Africa and Europe? _____
- 40. How old is the Earth? _____
- 41. What is the first period of the Paleozoic era? _____
- 42. What two periods are *not* represented in the bedrock of New York? _____
- 43. What animal group first evolved about the same time as the dinosaurs? _____

Page 10

- 44. At what two depths within the Earth is the temperature above the melting point? _____
- 45. What is Earth's radius in kilometers? _____ What is its diameter? _____
- 46. What is the composition of Earth's core? _____
- 47. Which layer of the Earth is the least dense? _____ Most dense; _____
- 48. In what part of the Earth does the temperature increase fastest with depth? _____

Pages 11

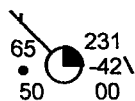
49. What is the two most common element in the oceans? _____
50. How long does it take an S-wave to travel 6000 km? _____ ...a P-wave? _____
51. How far away is the epicenter if the P-wave arrives 5 minutes before the S-wave? _____
52. What element makes up about 6% of crustal rocks by mass, but only 1/2% by volume? _____
53. How far can a P-wave travel in 5 minutes, 40 seconds? _____

Pages 12

54. If the wet bulb reads 4°C and the dry bulb records 12°C, what is the dewpoint? _____
55. What is the relative humidity in the conditions specified above? _____
56. What does a negative dewpoint mean? _____

Pages 13

57. What is the Kelvin temperature of 0° C? _____ What is this temperature in Fahrenheit? _____
58. What is the normal atmospheric pressure in inches of mercury? _____
59. What is the Fahrenheit temperature at this weather station? _____ Celsius? _____
60. What is the atmospheric pressure? _____ Is it rising or falling? _____
61. Wind speed? _____ Wind direction? _____ Cloud Cover? _____
62. A maritime tropical air mass is _____ and _____. (You should know this.)



Pages 14

63. How does the air temperature change as you go higher within the mesosphere? _____
64. What name has been given to the boundary at the bottom of the atmosphere? _____
65. What form of electromagnetic energy has a wavelength just too long to be visible to us? _____
66. What is the approximate wavelength of visible light? _____


67. What is the prevailing wind direction 45° south of the equator? _____
68. Why is precipitation so abundant near the equator? _____

Pages 15

69. Although Barnard's Star is relatively close to us, it is hard to see?
Compared to the sun, how much light does Barnard's Star give off? _____
70. The North Star is similar to the sun in _____ and _____.
How is it very different? _____
71. Rigel and Betelgeuse are two of the brightest stars in the prominent winter constellation Orion.
How does Betelgeuse appear different from Rigel to us? _____
72. Of the nine planets, which one spins the fastest on its axis? _____
73. Which planet has the most out of round (flattened) orbit? _____
74. Which planet is closest to the Earth in size? _____
75. Approximately how much larger is the sun's diameter than the diameter of the Earth? _____

Pages 16

76. What mineral has a nonmetallic luster, scratches glass and is often pink? _____
77. Name two common minerals that are chemical elements _____ and _____
78. What is the most obvious difference between amphibole and pyroxene? _____
79. What other minerals form crystals similar in shape to pyrite? _____



Tips: At Your Finger Tips (Ref. Tables Review)

Difficulty: Should be Fairly Easy

Content: Very Important

Mode of Instruction: Individual Work or Small Group Work
(If you opt for small groups, be sure that the slower students are not just copying the answers from their quicker peers.)

Preparations: None

Materials: Class set of Reference Tables

Time: 30 - 40 minutes (??)

Suggestions for the Teacher: 1. Monitor the students to be sure they are picking up needed skills and to get feedback on how well your have taught them.

Student Intro: 1. Stress that the Regents exam puts a heavy emphasis on the use of the ESRT. Mastery of that resources is critical (!!)

2. This should be a learning activity, not just a race to see if you can finish quickly.

Post-Lab: Can be followed up with a "Jeopardy" type game. The problem with such games is that the students who need the skills tend to be those who participate least.

Extensions: None

Source: TMcG